



UNIVERSITY OF CAMBRIDGE INTERNATIONAL EXAMINATIONS
General Certificate of Education Advanced Level

CHEMISTRY

9701/12

Paper 1 Multiple Choice

May/June 2011

1 hour

Additional Materials: Multiple Choice Answer Sheet
Soft clean eraser
Soft pencil (type B or HB is recommended)
Data Booklet



READ THESE INSTRUCTIONS FIRST

Write in soft pencil.

Do not use staples, paper clips, highlighters, glue or correction fluid.

Write your name, Centre number and candidate number on the Answer Sheet in the spaces provided unless this has been done for you.

There are **forty** questions on this paper. Answer **all** questions. For each question there are four possible answers **A, B, C** and **D**.

Choose the **one** you consider correct and record your choice in **soft pencil** on the separate Answer Sheet.

Read the instructions on the Answer Sheet very carefully.

Each correct answer will score one mark. A mark will not be deducted for a wrong answer.

Any rough working should be done in this booklet.

This document consists of **14** printed pages and **2** blank pages.



Section A

For each question there are four possible answers, **A**, **B**, **C**, and **D**. Choose the **one** you consider to be correct.

1 Helium, He, is the second element in the Periodic Table.

Tritium is the isotope of hydrogen ^3H .

What is the same in an atom of ^4He and an atom of ^3H ?

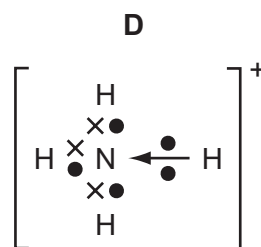
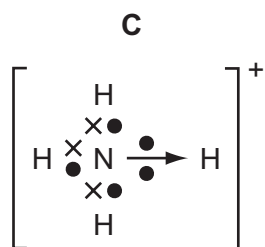
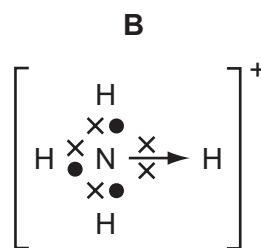
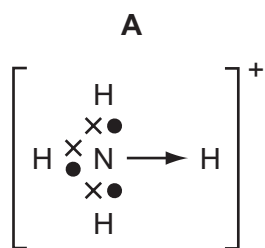
- A** the number of electrons
- B** the number of neutrons
- C** the number of protons
- D** the relative atomic mass

2 Which diagram correctly shows the bonding in the ammonium ion, NH_4^+ ?

key

● N electron

× H electron



- 3 Aluminium is the most abundant metal in the Earth's crust. The extraction of aluminium is carried out by the electrolysis of aluminium oxide dissolved in molten cryolite.

Which material is used for each of the electrodes in this electrolysis?

	anode	cathode
A	aluminium	carbon
B	carbon	carbon
C	carbon	steel
D	steel	aluminium

- 4 The esterification reaction



is an equilibrium. The forward reaction is exothermic.

How can the value of the equilibrium constant K_C be increased?

- A** by adding a little concentrated sulfuric acid as a catalyst
 - B** by increasing the initial concentration of ethanol
 - C** by lowering the temperature
 - D** by raising the temperature
- 5 Ammonia is manufactured on a large scale by the Haber process.

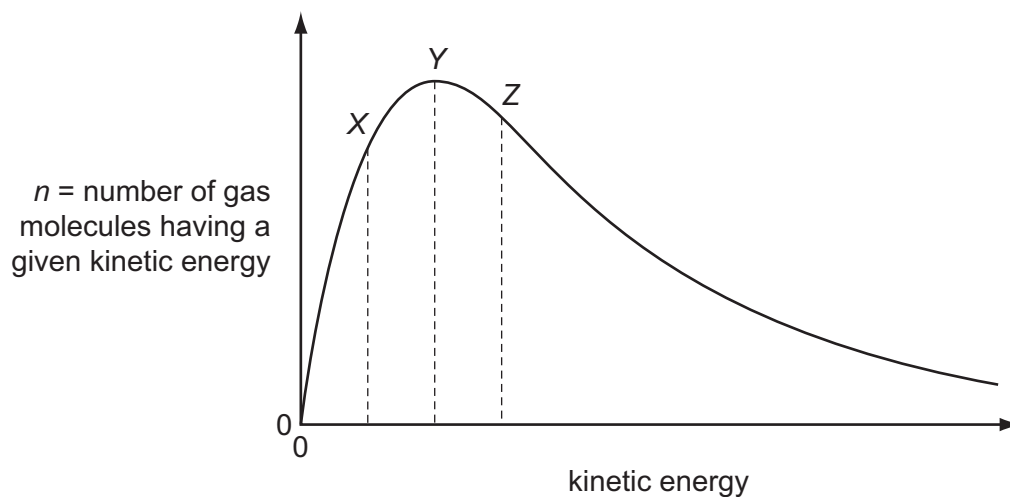
In a particular plant, conditions of 400 °C and 250 atm in the presence of an iron catalyst are used.



What could contribute most to increasing the equilibrium yield of ammonia?

- A** adding more catalyst
- B** increasing the pressure to 400 atm
- C** increasing the temperature to 1000 °C
- D** using air rather than nitrogen

- 6 The Boltzmann distribution for a gas at constant temperature is shown below.

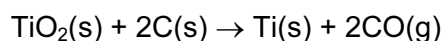


If the temperature of the gas is **reduced** by 10 °C the graph changes shape.

What happens to the values of n for the points marked X, Y and Z?

	X	Y	Z
A	higher	lower	higher
B	higher	lower	lower
C	lower	higher	lower
D	lower	lower	lower

- 7 Titanium occurs naturally as the mineral rutile, TiO_2 . One possible method of extraction of titanium is to reduce the rutile by heating with carbon.



The standard enthalpy changes of formation of $\text{TiO}_2(\text{s})$ and $\text{CO}(\text{g})$ are -940 kJ mol^{-1} and -110 kJ mol^{-1} respectively.

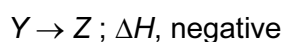
What is the standard enthalpy change of this reaction?

- A** -830 kJ mol^{-1}
- B** -720 kJ mol^{-1}
- C** $+720 \text{ kJ mol}^{-1}$
- D** $+830 \text{ kJ mol}^{-1}$

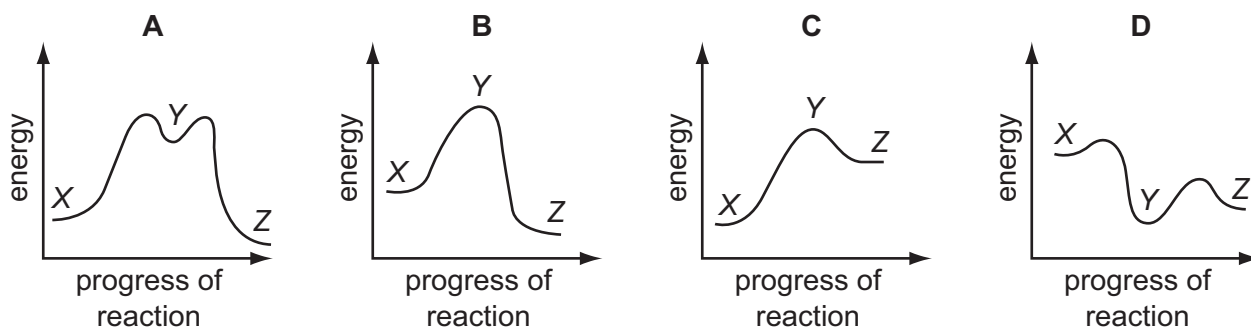
8 Which reaction has an enthalpy change equal to the standard enthalpy change of formation of propane?

- A $3\text{C}(\text{g}) + 4\text{H}_2(\text{g}) \rightarrow \text{C}_3\text{H}_8(\text{g})$
 B $3\text{C}(\text{g}) + 8\text{H}(\text{g}) \rightarrow \text{C}_3\text{H}_8(\text{g})$
 C $3\text{C}(\text{s}) + 4\text{H}_2(\text{g}) \rightarrow \text{C}_3\text{H}_8(\text{g})$
 D $3\text{C}(\text{s}) + 4\text{H}_2(\text{g}) \rightarrow \text{C}_3\text{H}_8(\text{l})$

9 In the conversion of compound X into compound Z, it was found that the reaction proceeded by way of compound Y, which could be isolated. The following steps were involved.



Which reaction profile fits these data?



10 Tanzanite is used as a gemstone for jewellery. It is a hydrated calcium aluminium silicate mineral with a chemical formula $\text{Ca}_2\text{Al}_x\text{Si}_y\text{O}_{12}(\text{OH}) \cdot 6\frac{1}{2}\text{H}_2\text{O}$. Tanzanite has M_r of 571.5.

Its chemical composition is 14.04% calcium, 14.17% aluminium, 14.75% silicon, 54.59% oxygen and 2.45% hydrogen.

(A_r values: H = 1.0, O = 16.0, Al = 27.0, Si = 28.1, Ca = 40.1)

What are the values of x and y?

	x	y
A	1	1
B	2	3
C	3	3
D	6	1

- 11 0.144 g of an aluminium compound **X** react with an excess of water, to produce a gas. This gas burns completely in O_2 to form H_2O and 72 cm^3 of CO_2 only. The volume of CO_2 was measured at room temperature and pressure.

What could be the formula of **X**?

[C = 12.0, Al = 27.0; 1 mole of any gas occupies 24 dm^3 at room temperature and pressure]


- A** Al_2C_3 **B** Al_3C_4 **C** Al_4C_3 **D** Al_5C_3

- 12 *Use of the Data Booklet is relevant to this question.*

Which element is likely to have an electronegativity similar to that of aluminium?

- A** barium
B beryllium
C magnesium
D strontium

- 13 In 1999, researchers working in the USA believed that they had made a new element and that it had the following electronic configuration.

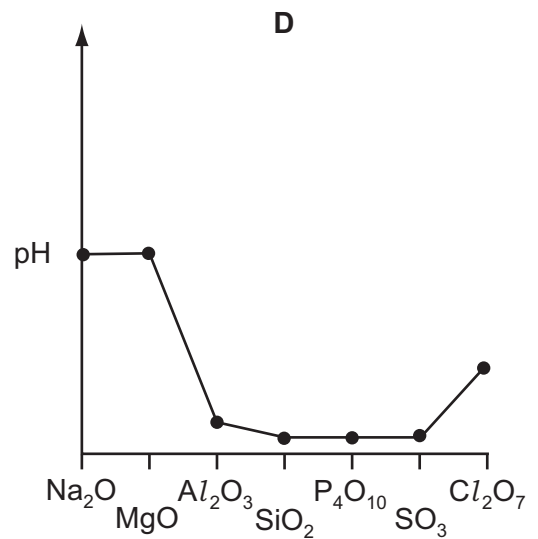
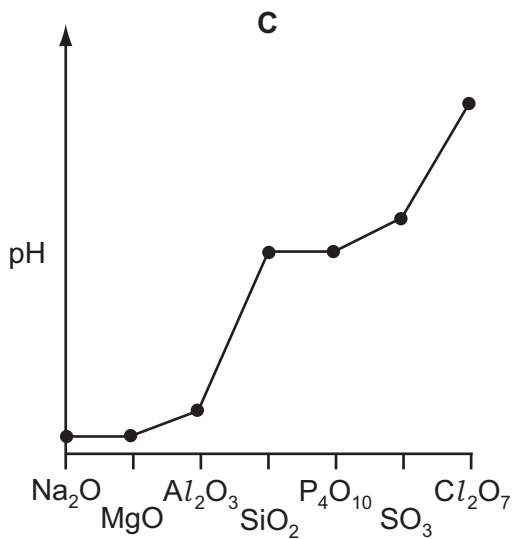
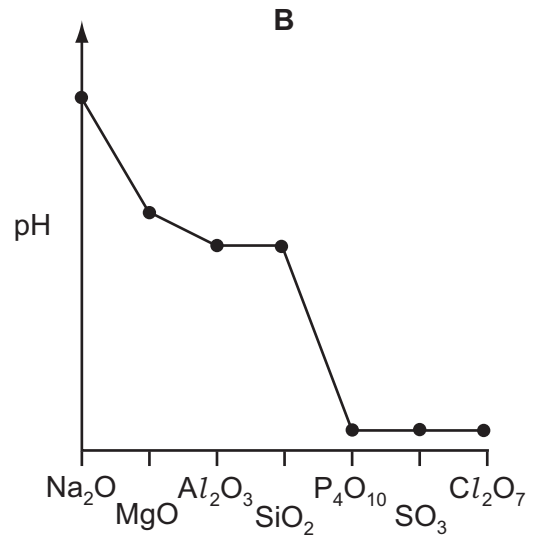
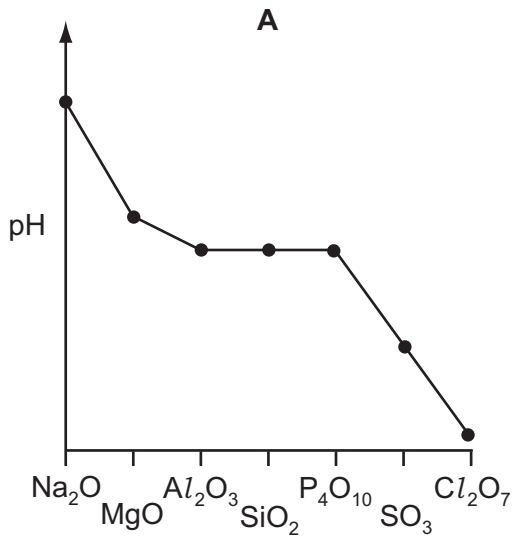


In which Group of the Periodic Table would you expect to find this element?

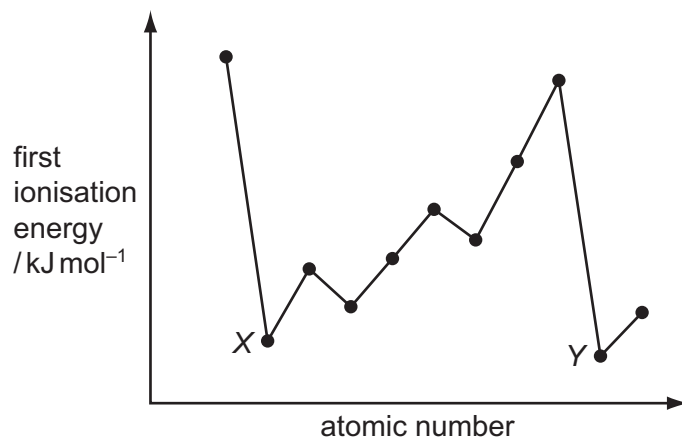
- A** II **B** IV **C** VI **D** 0

14 The highest oxides of the elements sodium to chlorine are separately added to water.

Which diagram best represents the pH of the resulting mixtures?



15 The diagram shows the first ionisation energies of 11 consecutive elements.



Which type of elements are labelled X and Y?

- A Group I metals
- B Group II metals
- C halogens
- D noble gases

16 Why does aluminium oxide dissolve in sodium hydroxide solution?

- A Aluminium oxide can behave as a base.
- B Aluminium oxide can behave as an acid.
- C Aluminium oxide has a giant structure.
- D The bonding in aluminium oxide is ionic.

17 Concentrated sulfuric acid can behave **both** as a strong acid **and** as an oxidising agent.

With which compound does concentrated sulfuric acid react in this way?

- A ethanol
- B magnesium carbonate
- C propanenitrile
- D sodium bromide

- 18 In the Contact process, what is the nature of the gaseous product and what is the identity of the catalyst?

	nature of gaseous product	catalyst
A	acidic	Fe
B	acidic	V ₂ O ₅
C	basic	Fe
D	basic	V ₂ O ₅

- 19 Which compound contains two different elements with identical oxidation states?

A HClO **B** Mg(OH)₂ **C** Na₂SO₄ **D** NH₄Cl

- 20 Which reagent gives the same visible result with propanal and with propan-2-ol?

A 2,4-dinitrophenylhydrazine reagent
B acidified potassium dichromate(VI)
C sodium
D Tollens' reagent

- 21 Which halogenoalkane will undergo an S_N1 reaction and produce a yellow precipitate when AgNO₃(aq) is added to it?

A 1-chlorobutane
B 1-iodobutane
C 2-chloro-2-methylpropane
D 2-iodo-2-methylpropane

- 22 Which reaction will give 2-chloropropane in the best yield?

A propane gas with chlorine gas in the presence of ultraviolet light
B propan-2-ol with dilute NaCl(aq)
C propan-2-ol with SOCl₂
D propene with dilute HCl(aq)

23 The products obtained by cracking an alkane, **X**, are methane, ethene and propene.

The mole fraction of ethene in the products is 0.5.

What is the identity of **X**?

- A** C₆H₁₄ **B** C₈H₁₈ **C** C₉H₂₀ **D** C₁₁H₂₄

24 Which compound does **not** show cis-trans isomerism?

- A** 2-methylpent-2-ene
B 3-methylpent-2-ene
C 3,4-dimethylhex-3-ene
D pent-2-ene

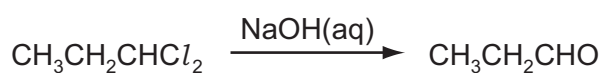
25 Which formulae show propanone and propanal as different compounds?

- A** empirical, molecular, structural **and** displayed formulae
B molecular, structural and displayed formulae **only**
C structural and displayed formulae **only**
D displayed formulae **only**

26 How many isomers with the formula C₅H₁₀ have structures that involve π bonding?

- A** 3 **B** 4 **C** 5 **D** 6

27 1,1-dichloropropane reacts with aqueous sodium hydroxide in a series of steps to give propanal.



Which term describes the first step of this reaction?

- A** electrophilic addition
B elimination
C nucleophilic substitution
D oxidation

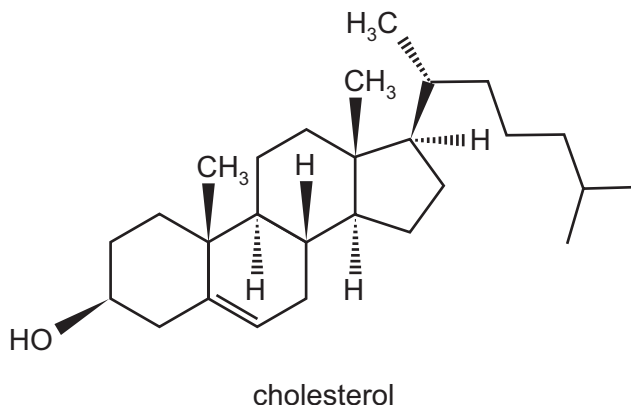
28 The ester $\text{CH}_3\text{CH}_2\text{CH}_2\text{CO}_2\text{CH}_3$ is responsible for the aroma of apples.

When this ester is hydrolysed by acid in the stomach, what is the empirical formula of the organic acid produced?

- A CH_2O B CH_4O C $\text{C}_2\text{H}_4\text{O}$ D $\text{C}_3\text{H}_6\text{O}_2$

29 This question should be answered by considering the reactions of KMnO_4 with different functional groups under the stated conditions.

The diagram shows the structure of the naturally-occurring molecule cholesterol.



Cholesterol is separately treated with

- cold, dilute acidified KMnO_4 ,
- hot, concentrated acidified KMnO_4 .

What is the change in the **number** of chiral carbon atoms in the molecule during each reaction?

	cold, dilute acidified KMnO_4	hot, concentrated acidified KMnO_4
A	+1	0
B	+1	-1
C	+2	0
D	+2	-1

30 Which reaction would **not** give ethanoic acid as a product?

- A** heating ethanenitrile under reflux with dilute sodium hydroxide
B heating ethanenitrile under reflux with dilute sulfuric acid
C heating ethanal under reflux with acidified sodium dichromate(VI)
D heating ethanol under reflux with acidified sodium dichromate(VI)

Section B

For each of the questions in this section, one or more of the three numbered statements 1 to 3 may be correct.

Decide whether each of the statements is or is not correct (you may find it helpful to put a tick against the statements that you consider to be correct).

The responses **A** to **D** should be selected on the basis of

A	B	C	D
1, 2 and 3 are correct	1 and 2 only are correct	2 and 3 only are correct	1 only is correct

No other combination of statements is used as a correct response.

- 31** Solid calcium carbonate is added to 100 cm³ of dilute hydrochloric acid and the rate of the reaction is measured. 100 cm³ of distilled water is then added to a second 100 cm³ portion of the acid, and the experiment repeated under the same conditions.

Why does the addition of water decrease the rate of the reaction?

- 1 Adding water reduces the frequency of collisions between reactant molecules.
- 2 Adding water reduces the proportion of effective collisions between reactant molecules.
- 3 Adding water reduces the proportion of reactant molecules possessing the activation energy.

- 32** When a sample of a gas is compressed at constant temperature from 1500 kPa to 6000 kPa, its volume changes from 76.0 cm³ to 20.5 cm³.

Which statements are possible explanations for this behaviour?

- 1 The gas behaves non-ideally.
- 2 The gas partially liquefies.
- 3 Gas is adsorbed on to the vessel walls.

- 33** Which equations apply to an ideal gas?


[p = pressure, V = volume, M = molar mass, ρ = density, c = concentration, R = gas constant, T = temperature]

- 1 $\rho = \frac{\rho RT}{M}$ 2 $pV = MRT$ 3 $pV = \frac{cRT}{M}$

34 What is involved when a hydrogen bond is formed between two molecules?

- 1 a hydrogen atom bonded to an atom less electronegative than itself
- 2 a lone pair of electrons
- 3 an electrostatic attraction between opposite charges

35 When the yellow liquid NCl_3 is stirred into aqueous sodium hydroxide, the reaction that occurs can be represented by the following equation.



What will be the result of this reaction?

- 1 The nitrogen undergoes a redox reaction.
- 2 A bleaching solution remains after the reaction.
- 3 The final solution gives a precipitate with acidified silver nitrate.

36 In a car engine pollutant oxide **Y**, which contains non-metallic element **X**, is formed.

Further oxidation of **Y** to **Z** occurs in the atmosphere. In this further oxidation, 1 mol of **Y** reacts with 0.5 mol of gaseous oxygen.

X could be either nitrogen or sulfur.

Which statements about **X**, **Y** and **Z** can be correct?

- 1 The oxidation number of **X** increases by two from **Y** to **Z**.
- 2 **Y** may have an unpaired electron in its molecule.
- 3 **Y** is a polar molecule.

37 Which compounds can be obtained from ethene in a **single** reaction?

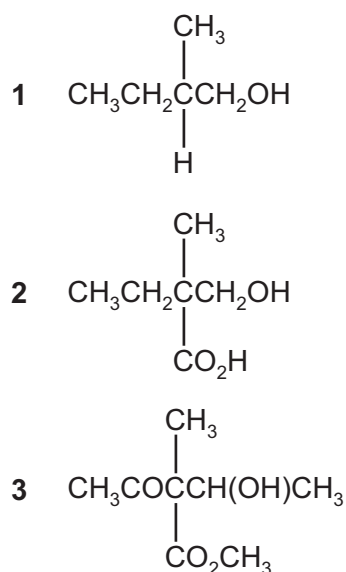
- 1 CH_3CH_3
- 2 $\text{-(CH}_2\text{CH}_2\text{)-}_n$
- 3 $\text{HOCH}_2\text{CH}_2\text{OH}$

The responses **A** to **D** should be selected on the basis of

A	B	C	D
1, 2 and 3 are correct	1 and 2 only are correct	2 and 3 only are correct	1 only is correct

No other combination of statements is used as a correct response.

- 38 Which compounds when heated under reflux with an excess of hot acidified potassium dichromate(VI), give a product with a chiral centre?



- 39 In the reaction between an aldehyde and HCN, catalysed by NaCN, which statements about the reaction mechanism are correct?

- 1 A new carbon-carbon bond is formed.
- 2 In the intermediate, the oxygen carries a negative charge.
- 3 The last stage involves the formation of a hydrogen-oxygen bond.

- 40 An organic compound, **X**, will react with an excess of calcium metal to produce a salt with the empirical formula $\text{CaC}_4\text{H}_6\text{O}_4$.

What could be the identity of **X**?

- 1 ethanoic acid
- 2 butanedioic acid
- 3 methylpropanedioic acid

BLANK PAGE

Permission to reproduce items where third-party owned material protected by copyright is included has been sought and cleared where possible. Every reasonable effort has been made by the publisher (UCLES) to trace copyright holders, but if any items requiring clearance have unwittingly been included, the publisher will be pleased to make amends at the earliest possible opportunity.

University of Cambridge International Examinations is part of the Cambridge Assessment Group. Cambridge Assessment is the brand name of University of Cambridge Local Examinations Syndicate (UCLES), which is itself a department of the University of Cambridge.